

Section-A (Reading Comprehension- 10M)

1. Read the passage carefully.

Monsoon is a season with heavy rains caused by special winds that change direction. These rains come from the ocean and usually start around June, lasting until September. Monsoon rain is very important for farming because it waters the crops. People look forward to it because it cools down the hot weather and makes the land green again.

Rains are vital for several reasons. They provide the water needed for crops to grow, which is essential for food production. Rains also restock rivers, lakes, and groundwater, ensuring a steady water supply for drinking, irrigation, and other needs. It keeps the land green and supports all living things. Additionally, rain cools the atmosphere and helps clean the air by washing away dust and pollutants.

Answer the following questions.

- 1. Where do rains come from? 1M
- 2. In which season we are? (monsoon/spring)? 1M

Fill in the blanks.

- 3. ____ are vital for several reasons. 1M
- 4. It keeps the land _____ and supports all living things. 1M

Choose the correct answer.

5. Monsoon is a season with _____ caused by special winds that change direction. 1M

- a. heavy rains b. hot sun c. chilled climate

6. They provide the water needed for crops to grow, which is essential for _____ 1M

- a. avoid pollution b. population c. food production

State whether the following statements are TRUE/ FALSE.

- 7. It keeps the land green and supports all living things. () 1M
- 8. Monsoon rain is not so important for farming. () 1M

9. Find the word which mean the same from the passage. 2M

- a. begin = _____
- b. wait = _____

Section- B (Writing)

II. Composition

5M

Look at the picture carefully and write a short paragraph by answering the following questions.



1. Where is the setting in the above picture?
2. What are the students doing?
3. What is your favourite subject?
4. Do you enjoy coming to school? Why?
5. Write any two points on how to keep our classroom neat.

III. Grammar

(10M)

A. Rewrite the sentences with the contraction form of the underlined words.

1. Hari did not eat his lunch.
2. We are having a fun time.
3. Let us take a selfie.
4. The children are not coming inside.
5. I will let you know the time.

5X1=5M

B. Fill in the blanks with questioning words like- Why, Where, Who, What.

5X1=5M

1. _____ won T20 world cup 2024?
2. _____ do you like to do in your free time?
3. _____ did Mina go in the summer vacation?
4. _____ do plants need sunlight to grow?
5. _____ cooks food at your home?

Section- C (Literature)

(15M)

IV.A. Read the extract given and answer the questions that follow.

3M

1. "What are you going to do with these vegetable scraps?"

a. From which lesson are these lines taken?

b. Who spoke the above lines?

c. Which word in the above lines mean waste?

B. Answer the following questions.

2. Why did the geese cry "Help! Help!"? 1M

3. Why was the baton passed? 1M

4. What were the preparations in the palace for? 1M

5. In which season is ice cream popular? 1M

6. Why did the old bird advise the other bird to destroy the creeper? 2M

7. What is teamwork? 2M

8. What had the cook planned to do with the vegetable scraps? 2M

9. Name the different flavours of ice creams the Ice-cream Man is selling? 2M



Veeramachaneni Paddayya Pa

SIDDHARTHA PUBLIC SCHOOL

(Sponsored by Siddhartha Academy of General & Technical Education)

PERIODIC TEST - 1, JULY - 2024-25

SUBJECT: ULLANG (TELEGU)

Marks: 40

Time: 1 1/2 hr

Class : V

Date: 12-07-2024

I. క్రింది పద్యాలలో ఒక పద్యం పాదభంగం కలగకుండా పూరించుము.

1x4=4

1. అప్పిచ్చు..... నుమతి (లేదా) 2. ప్రశ్న..... మాట

II. క్రింది పదాలకు సరైన అర్థాలు గుర్తించి వ్రాయుము.

5x1=5

- | | | | |
|----------------|------------------|-------------------|------------------|
| 1. పీఠము = | అ) అద్దె | ఆ) గద్దె | ఇ) గద |
| 2. ద్విజుడు = | అ) చెలికాడు | ఆ) స్నేహితుడు | ఇ) బ్రాహ్మణుడు |
| 3. బాట = | అ) దారం | ఆ) దారి | ఇ) దూరం |
| 4. జనియించుట = | అ) పుట్టుట | ఆ) పెట్టుట | ఇ) మెట్టుట |
| 5. దినదర్శ = | అ) రోజు చేసే పని | ఆ) నెలకు చేసే పని | ఇ) వారం చేసే పని |

III. క్రింది పదాలకు వ్యతిరేక పదాలు వ్రాయుము.

5x1=5

1. స్వర్గం x 2. వెలుతురు x 3. గౌరవం x 4. ఆసక్తి x 5. చిన్న

IV. క్రింది ఖాళీలకు సరైన సమాధానాలు గుర్తించి వ్రాయుము.

4x1=4

1. రవి కళ్ళు _____ తో మెరిశాయి.

- అ) విదారం ఆ) కన్నీళ్ళు ఇ) ఆనందం

2. పొగడరా నీ తల్లి _____ భారతిని.

- అ) దేశ ఆ) ప్రకృతి ఇ) భూమి

3. పకులన్నీ కష్టంలో ఉన్న పిచ్చుకకు _____ చేస్తున్నాయి.

- అ) సహాయం ఆ) వైద్యం ఇ) అపాయం

4. ఏ మంచి _____ ప్రేమించినావో .

- అ) పూవులనీ ఆ) పండ్లను ఇ) కాయలను

V. క్రింది పదాలకు వచనాలు మార్చి వ్రాయుము.

5x1=5

1. జాతి - 2. పకులు - 3. కాళ్ళు - 4. పొరుడు - 5. తీగ -

VI. క్రింది పదాలను సొంత వాక్యాలలో ఉపయోగించి వ్రాయుము

2×1 =2

1. పుణ్యం

2. సఫలీకృతం

VII. క్రింది ప్రశ్నలకు సమాధానాలు వ్రాయుము.

అ) 1. రవికి ఏమి ఇష్టం?

3×1 =3

2. "ఏ దేశమేగినా...." గేయ రచయిత ఎవరు?

3. సుమతీ కతక కర్త ఎవరు?

ఆ) 4. రవి ఏమి ఆలోచిస్తుంటాడు?

1×2 =2

VIII. క్రింది గద్యమును చదివి, ప్రశ్నలకు సమాధానాలు గుర్తించి వ్రాయుము.

4×1 =4

మహాబారతంలో ద్రోణుని కుమారుడు అశ్వత్థామ, ఇతని తల్లి కృప. ఇతడు మరణము లేని చిరంజీవి.

అశ్వత్థామ కురుక్షేత్ర సంగ్రామంలో కొరవుల పక్షాన యుద్ధం చేశాడు. ద్రోణుడు అస్త్ర సన్యాసం చేసి దృష్టద్యుమ్నుని చేతిలో మరణం పాలైనాడు. కక్షలో రగిలిపోయిన అశ్వత్థామ చనిపోతున్న తండ్రి దగ్గర యుద్ధానంతరం ఎలాగైనా దృష్టద్యుమ్నుని చంపేటట్లు అనుమతి తీసుకున్నాడు.

ప్రశ్నలు

1. ద్రోణుని కుమారుడు పేరు ఏమిటి?

అ) అర్జునుడు

ఆ) అశ్వత్థామ

ఇ) అమరుడు

2. అశ్వత్థామ ఎవరి పక్షాన యుద్ధం చేశాడు?

అ) కొరవులు

ఆ) పాండవులు

ఇ) రాక్షసులు

3. అశ్వత్థామ తల్లి పేరు ఏమిటి?

అ) స్వరూప

ఆ) దీప

ఇ) కృప

4. ద్రోణుడు ఎవరి చేతిలో మరణం పాలైనాడు?

అ) దృతరాష్ట్రుడు

ఆ) దృష్టద్యుమ్నుడు

ఇ) విదురుడు

IX. క్రింది పదాలను ఉతపరుచుము.

6X1=6

1. రవి తండ్రి పేరు

నార్ల వెంకటేశ్వరరావు

2. లేరురా మన వంట

నిండు గౌరవము

3. నార్ల వారి మాట కతక కర్త

కడుపు

4. నిలుపరా నీ జాతి

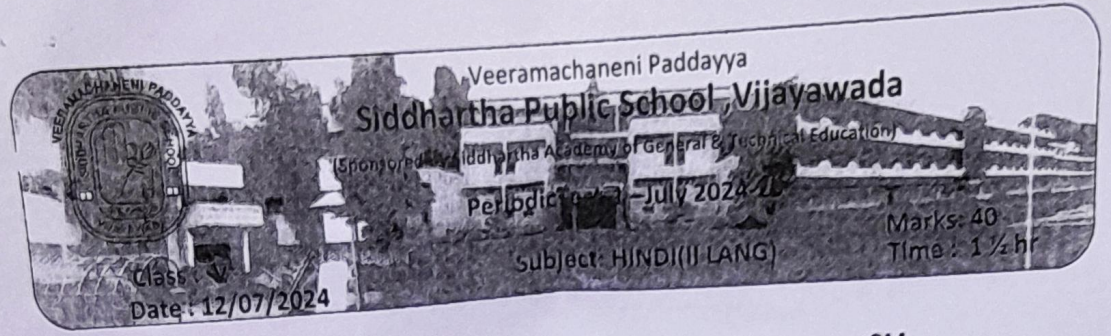
రాఘవ

5. గర్భము.

చల్లని తల్లి లేదు

6. మనభూమి వంటి

పౌరులిన కెందు



I) पद्य पूरा कीजिए:-

2M

वह देखो ----- लाया है। (4 Lines)

II) इनके अर्थ लिखिए:-

6x1=6M

- | | | |
|-----------|-----------|----------|
| 1) समझदार | 2) मनचाही | 3) इलाका |
| 4) गोद | 5) हल | 6) प्रथा |

III) इनके विलोम शब्द लिखिए:-

4x1=4M

- | | | | |
|--------------|------------|-----------|-----------|
| 1) सुपुत्र x | 2) उपकार x | 3) मोक्षx | 4) आदान x |
|--------------|------------|-----------|-----------|

IV) इनके वचन बदलकर लिखिए:-

3x1=3M

- | | | |
|-----------|--------|------------|
| 1) खिलौना | 2) कौआ | 3) गुड़िया |
|-----------|--------|------------|

V) प्रत्यय जोड़कर लिखिए:-

2X1=2M

- | | |
|-----------------|----------------|
| 1) मिठाई + वाला | 2) होशियार + ई |
|-----------------|----------------|

VI) इनके दो-दो पर्यायवाची शब्द लिखिए:-

3X1=3M

- | | | |
|--------|---------|---------|
| 1) आँख | 2) सोना | 3) अमृत |
|--------|---------|---------|

VII) किसने किससे कहा?

2X1=2M

- 1) " मैं रस्सी बना तो दूँगी ।"
- 2) " तुम इन्हें लेकर शहर जाओ।"

VIII) रेखांकित संज्ञा का भेद पहचानिए:-

3X1=3M

- 1) आज मैं बहुत खुश हूँ ।
- 2) हाथी जंगल में रहता है।
- 3) मैं दिल्ली में रहता हूँ ।

IX) उचित शब्द चुनकर खाली स्थान भरिए:-

4X1=4M

- 1) वे उठकर _____ से बाहर गए । (घर / कमरे)
- 2) गुरुजी, विमला दिदी झिलमिल भैया _____ के चूल्हे पर खिचड़ी बनाते थे । (पत्थर / ईंट)
- 3) _____ का तिलकुट बहुत प्रसिद्ध है । (गया / काशी)
- 4) तुम दोबारा _____ को लेकर जाओ। (भेड़ों / बकरियों)

X) इन प्रश्नों के उत्तर लिखिए:-

- 1) तिब्बत के मंत्री का नाम क्या था ? 1M
- 2) फसलों से जुड़े त्योहार किस समय मनाते हैं? 1M
- 3) खिलौनेवाला कौन-कौन से खिलौने बेचता है? 2M
- 4) तिल का किन-किन रूपों में इस्तेमाल किया जाता है? 2M
- 5) मंत्री ने अपनी बेटे को क्या दिया और क्या कहा? 2M
- 6) फसलों से जुड़े त्योहार कौन-कौन से हैं? 3M



Veeramachaneni Paddayya
Siddhartha Public School, Vijayawada

(Sponsored by Siddhartha Academy of General & Technical Education)

PERIODIC TEST - JULY-2024

Class - V

Date : 11/07/2024

Subject: MATHEMATICS SET - B

Marks: 40
Time : 1 1/2 hr

I. CHOOSE THE CORRECT ANSWER :

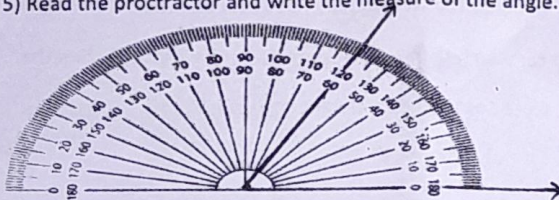
5 X 1M = 5M

- 1) An angle tester in geometry box is called _____
a) scale b) protractor c) compass d) divider
- 2) One crore = _____ lakhs.
a) 10 b) 100 c) 1000 d) 10 000
- 3) An angle is measured in _____
a) degrees b) cm c) litres d) kg
- 4) The numeral for half of one lakh is _____
a) 50,000 b) 20,000 c) 40,000 d) 10,000
- 5) The instrument which is used to measure an angle is
a) Scale b) protractor c) Compass d) Set squares

II. FILL IN THE BLANKS :

6 X 1 M = 6M

- 1) _____ is the strongest polygon.
- 2) Write in expanded form. 45,601.
- 3) When an angle of polygon is changed, its _____ also changes.
- 4) The smallest 7-digit number is _____.
- 5) Read the protractor and write the measure of the angle.



- 6) write the numeral using International system.

Five hundred twelve million two hundred sixteen thousands seven hundred two.

III. MATCHING :

4 X 1M = 4M

The measure of

- 1) a right angle a) 180°
- 2) 2 times of a right angle b) 45°
- 3) $\frac{1}{2}$ of a right angle c) 30°
- 4) $\frac{1}{3}$ of a right angle d) 90°

$$5 \times 2M = 10M$$

IV. ANSWER THE FOLLOWING WITH NECESSARY STEPS :

- 1) Make 2 shapes using 6 match sticks.
- 2) Sandeep took a loan of 8000 rupees to buy a net. He paid back 732 rupees every month for one year. How much amount did he pay back to the bank ?
- 3) The length of the big fish is 18m. The length of a small fish is 3cm. How many times longer is the big fish than the small fish ?
- 4) A boat brings 900 kg of fish in 1 trip.
 - a) How much fish does it bring in 4 trips ?
 - b) In how many trips will it bring 2700 kg of fish ?
- 5) The speed of a boat is 40km per hour.
 - a) Find the distance covered by it in two and half hours .
 - b) Find the time taken by it to go 200 km .

$$5 \times 3M = 15M$$

V. ANSWER THE FOLLOWING WITH NECESSARY STEPS :

- 1) Write the name BABU using straight lines and count and write the number of right angles, more than right angles and less than right angles in it.
- 2) When fresh fish dried, it becomes one-third of its weight.
 - a) How much dry fish will you get from 6000 kg of fresh fish ?
 - b) How much money will you earn from 6000 kg of fresh fish, if you buy fresh fish for 30 rupees a kg and sell dry fish for 120 rupees a kg ?
- 3) The weight of the car is about 8000kg. The weight of a cycle is about 50kg.
About how much more does the car weigh than 30 cycles of the same weight put together ?
- 4) Write the following angles as acute, obtuse and straight angle.
 - a) 60°
 - b) 120°
 - c) 155°
 - d) 180°
 - e) 30°
 - f) 160°
- 5) Write the smallest and greatest 6-digit number using the following digits.

DIGITS	SMALLEST NUMBER	GREATEST NUMBER
a) 3, 0, 4, 5, 2, 9		
b) 1, 6, 7, 2, 8, 5		
c) 8, 4, 6, 5, 7, 3		



Veeramachaneni Paddayya
Siddhartha Public School, Vijayawada

(Sponsored by Siddhartha Academy of General & Technical Education)

PERIODIC TEST-I, JULY:2024-25

CLASS : V
Date : 10/07/2024

SUBJECT : SCIENCE

Max. 40
Time: 1 1/2 hr

I CHOOSE THE CORRECT OPTION.

(5X1M=5M)

- Snakes are friends of _____.
a) Doctors b) farmers c) lawyers d) children
- Jim Corbett national park is in _____.
a) Gujarat b) Kerala c) Uttarakhand d) Bihar
- The taste of karela is _____.
a) sour b) sweet c) bitter d) salty
- Saperas carry snakes in _____ baskets.
a) bamboo b) plastic c) jute d) leather
- Food digests faster in _____ than outside.
a) lungs b) kidneys c) heart d) stomach

II FILL IN THE BLANKS.

(5X1M=5M)

- Designs of snakes used in rangoli is called _____.
- A _____ gives a sick person some strength quickly even without eating.
- Animals at the risk of extinction are called _____ animals.
- Some male _____ can identify their females by their smell.
- Medicine for snake bite is available in all _____ hospitals.

III MATCH THE FOLLOWING.

(4X 1/2M=2M)

- | | | |
|------------|--------|-----|
| 1. Sloth | 12hrs. | () |
| 2. Cow | 2hrs. | () |
| 3. Cat | 17hrs. | () |
| 4. Giraffe | 4hrs. | () |

IV READ THE PASSAGE CAREFULLY AND ANSWER THE QUESTIONS

(3X1M=3M)

Food can maintain and save life. It can destroy life as well. Proper food serves as medicine, improper food works as poison. If we go about eating all sorts of things, we shall become sick. Even cattle, birds and beasts eat only what is best for their body. We mostly eat processed food and refined sugar. We pay heavily for junk food, for Chinese dishes or deep fried snacks. This way we invite obesity and diabetes.

- (a) Why do we eat food?
- (b) What is meant by 'proper food'?
- (c) How do we invite obesity and diabetes?

V ANSWER THE FOLLOWING QUESTIONS. (6X1M=6M)

1. Name any two instruments used in been party that are made of dried gourd.
2. How do snakes hear?



3. Identify the internal organ. What is its function?
4. What are the following animals hunted for?
a) Rhinoceros b) Elephant
5. How do you feel when you are hungry? (any two)
6. List any two people who depend on animals for their livelihood.

VI ANSWER THE FOLLOWING QUESTIONS. (5X2M=10M)

1. List the four poisonous snakes of our country.
2. Name the following:
a) Liquid in the stomach
b) Tiny bumps on the tongue
3. How can mosquitoes find you?
4. How are poisonous snakes made harmless?
5. Write about tiger's whiskers.

VII ANSWER THE FOLLOWING QUESTIONS. (3X3M=9M)

1. Write about the eye-sight of birds.
2. Aryanath's grandfather suggests him to make a different life for himself. How?
3. a) Where does digestion begin?
b) How would you explain it?

EXTRA

Veeramachaneni Paddayya
 Sri Hkatha Public School, Vijayawada
 (Sponsored by Veeramachaneni Padma Lakshmi Education)

PERIODIC TEST - JULY-2024

Class: V
 Date: 09/07/2024

Marks: 20
 Time: 1hr

Instructions: 1. Carefully read all the questions and answer them.
 2. Maintain neat handwriting.

I. FILL IN THE BLANKS

5X1=5M

1. _____ computer provides the functionality of both analog and digital computers.
2. USB flash drives like pen drive and memory card are connected through _____ connector.
3. Microcomputers are made to be used by one person at a time. [True/False] _____.
4. Optical discs like CDs, DVDs and Blu ray do not require an optical disk drive to connect to the computer [True/False] _____.
5. Full form of ATM _____.

II. GIVE TWO EXAMPLES FOR EACH OF THE FOLLOWING

5X1=5M

1. Handheld computers
2. Super computer
3. Mini computers
4. Digital computer
5. Mainframe computers

III. ANSWER THE FOLLOWING

5X2= 10M

1. What do you mean by embedded systems?
2. What is windows media player?
3. How are computers categorized?
4. What is snap feature of windows10?
5. What is the use of pictures folder in windows10?

Extra



Veeramachaneni Paddayya Pad

SIDDHARTHA PUBLIC SCHOOL

(Sponsored by Siddhartha Academy of General & Technical Education)

PERIODIC TEST - 1, JULY - 2024-25

SUBJECT: MLANG (HINDI)

Class : V

Date: 08-07-2024

Marks: 20

Time: 1hr

Name:

Section:

Roll No.

I Fill in the blanks:

6X½=3

- उ ----- ए
- च ----- ज ----- अ
- त थ ----- ध -----

II Write next letters:

4X½=2

- अ -----
- ख -----
- ट -----
- ए -----

III Write before letter:

4X½=2

- र
- फ
- ई
- अ:

IV Join the letters and make a word:

3X1=3

- श + ह + र = -----
- क + ट + ह + ल = -----
- भ + व + न = -----

V Write the meanings in English:

4X1=4

- चल = -----
- खत = -----
- उपवन = -----
- गगन = -----

VI Match the meanings:


4X1=4

- | | |
|------------|------|
| 1. Naughty | उछल |
| 2. Tap | सड़क |
| 3. Jump | नटखट |
| 4. Road | नल |

VII Name the picture in Hindi using the help box:

2X1=2

(कमल, खग)





Veeramachaneni Paddayya
Siddhartha Public School, Vijayawada

(Siddhartha Public School, Vijayawada, Andhra Pradesh)

T.E.T. 2024

Class: V
Date: 8-7-2024

Subject: Telugu (3rd SEPE)

Marks: 20
Time: 1hr

I. అచ్చులు వ్రాయుము (అ to అః). 4M

(Write Achulu (అ to అః)).

II. మహా ప్రాణాక్షరాలు వ్రాయుము. 4M

(Write Maha pranaksaralu.)

III. క్రింది అక్షరాలకు గుణింతపు గుర్తులను జత పరచుము. 2M

(Match the following Gunintapu Gurtulu.)

1. అ న
2. ఐ డ
3. ఓ ా
4. ఋ ౠ

IV. క్రింది గళ్ళలో అక్షరాలను ఉపయోగించి ప్రశ్నలకు జవాబులు వ్రాయుము. 3M

(Write the answers to the questions using the letters in the spaces below.)

ప	డ	వ	క	ల
1	2	3	4	5

1. 3వ అక్షరం ఏమిటి? _____
2. 2వ అక్షరం ఏమిటి? _____
3. 1,5, 4 అక్షరాలు కలిపి వ్రాయుము. _____

[P.T.O]

V. క్రింది అక్షరాలకు తరువాత వచ్చు అక్షరము వ్రాయుము.

3M

(Write the letter that comes after the following letters.)

1. ఇ _____

2. ట _____

3. ల _____

VI. క్రింది పదాలను బొమ్మలతో జతపరచుము.

4M

(Match the following words with the pictures.)

1. పనస

అ.



2. కుల

ఆ.



3. ఆకు

ఇ.



4. పోయల

ఈ.

